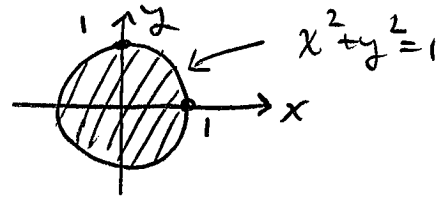


Question 1: A flat circular plate occupies the region $x^2 + y^2 \leq 1$. The temperature at point (x, y) is given by $T(x, y) = x^2 + 2y^2 - x$. Determine the hottest and coldest temperatures on the plate.

Find absolute maximum and minimum of

$$T(x, y) = x^2 + 2y^2 - x \text{ on } D:$$



In interior of D :

$$\left. \begin{array}{l} T_x = 2x - 1 \\ T_y = 4y \end{array} \right\} T_x = T_y = 0 \text{ at } \left(\frac{1}{2}, 0\right), T\left(\frac{1}{2}, 0\right) = \boxed{-\frac{1}{4}}$$

↑
min.

On boundary of D :

$$y^2 = 1 - x^2, \text{ so } T = x^2 + 2(1 - x^2) - x$$

$$= 2 - x - x^2, \quad -1 \leq x \leq 1$$

$$\frac{dT}{dx} = -1 - 2x = 0 \text{ at } x = -\frac{1}{2}$$

| x | $T = 2 - x - x^2$ |
|----------------|----------------------|
| -1 | 2 |
| $-\frac{1}{2}$ | $\frac{9}{4}$ ← max. |
| 1 | 0 |

$\therefore T$ has an absolute maximum of $\frac{9}{4}$,
and an absolute minimum of $-\frac{1}{4}$.

Question 2: Find three real numbers whose sum is 9 and the sum of whose squares is as small as possible. Be sure to justify that the solution you find does indeed correspond to the desired minimum.

$$\text{Minimize } f(x, y, z) = x^2 + y^2 + z^2$$

$$\text{subject to } x + y + z = 9.$$

$$\therefore z = 9 - x - y \Rightarrow f(x, y, z) = g(x, y) = x^2 + y^2 + (9 - x - y)^2$$

Let's minimize $g(x, y)$ on \mathbb{R}^2 :

$$g_x = 2x - 2(9 - x - y) = 4x + 2y - 18$$

$$g_y = 2y - 2(9 - x - y) = 2x + 4y - 18$$

$$g_x = g_y = 0 \Rightarrow \begin{cases} ① 4x + 2y - 18 = 0 \\ ② 2x + 4y - 18 = 0 \end{cases} \begin{matrix} \xrightarrow{② \times 2} \\ \xrightarrow{② - ①} \end{matrix} \Rightarrow \begin{cases} ① 4x + 2y - 18 = 0 \\ ② 4x + 8y - 36 = 0 \end{cases} \Rightarrow \begin{matrix} 6y = 18 \\ y = 3 \\ \Rightarrow x = 3 \end{matrix}$$

$$\therefore x = 3, y = 3 \Rightarrow z = 9 - x - y = 3.$$

f clearly has an absolute min. which corresponds to an absolute min of g . The absolute min. of g is also a rel. min, so must occur at a C.P.

We found one such C.P., so this CP must correspond to the absolute min. of f (subject to the constraint).

$\therefore x = 3, y = 3, z = 3$ are the required numbers.

Question 3: Find the volume of the solid that lies between the surface $z = y + \frac{x}{y^2}$ and the rectangle in the xy -plane $R = [0, 2] \times [1, 2]$.

$$\begin{aligned}
 V &= \int_{y=1}^2 \int_{x=0}^2 \left(y + \frac{x}{y^2} \right) dx dy \\
 &= \int_{y=1}^2 \left[xy + \frac{x^2}{2y^2} \right]_{x=0}^2 dy \\
 &= \int_{y=1}^2 \left(2y + \frac{4}{2y^2} \right) dy \\
 &= \left[y^2 - \frac{2}{y} \right]_1^2 \\
 &= (4 - 1) - (1^2 - 2) \\
 &= 3 + 1 \\
 &= \boxed{4}
 \end{aligned}$$

[5]

Question 4: Evaluate the following double integral:

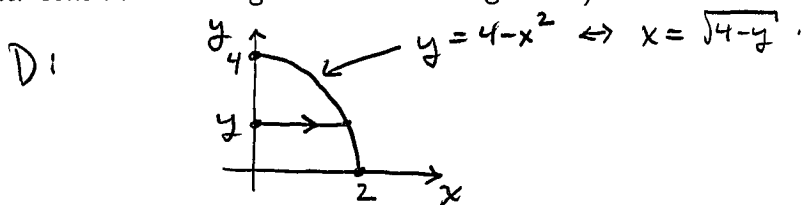
$$\begin{aligned}
 &\int_0^1 \int_0^{y^2} y^3 e^{xy} dx dy \\
 &= \int_{y=0}^1 \left[y^3 \frac{e^{xy}}{y} \right]_{x=0}^{y^2} dy \\
 &= \int_0^1 (y^2 e^{y^3} - y^2) dy \\
 &= \left[\frac{e^{y^3}}{3} - \frac{y^3}{3} \right]_0^1 \\
 &= \left(\frac{e}{3} - \frac{1}{3} \right) - \left(\frac{1}{3} - 0 \right) \\
 &= \boxed{\frac{e-2}{3}}
 \end{aligned}$$

[5]

Question 5: Evaluate the following double integral:

$$I = \int_0^2 \int_0^{4-x^2} \frac{x e^{2y}}{4-y} dy dx$$

(Hint: consider reversing the order of integration.)

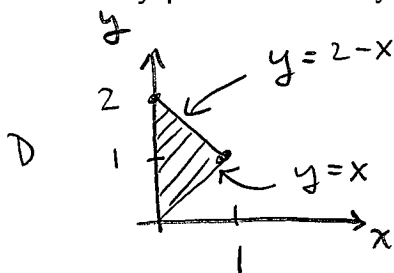


$$\begin{aligned} \therefore I &= \int_{y=0}^4 \int_{x=0}^{\sqrt{4-y}} \left(\frac{x e^{2y}}{4-y} \right) dx dy \\ &= \int_{y=0}^4 \left(\frac{e^{2y}}{4-y} \right) \left[\frac{x^2}{2} \right]_0^{\sqrt{4-y}} dy \\ &= \int_{y=0}^4 \frac{e^{2y}}{4-y} \frac{(\sqrt{4-y})^2}{2} dy \end{aligned}$$

$$\begin{aligned} &= \frac{1}{4} \left[e^{2y} \right]_0^4 \\ &= \boxed{\frac{1}{4} (e^8 - 1)} \end{aligned}$$

[5]

Question 6: Find the volume of the region bounded between the paraboloid $z = x^2 + y^2$ and the triangle in the xy -plane enclosed by the lines $y = x$, $x = 0$ and $x + y = 2$.



$$V = \iint_D (x^2 + y^2) dA$$

$$= \int_{x=0}^1 \int_{y=x}^{2-x} (x^2 + y^2) dy dx$$

$$= \int_{x=0}^1 \left[x^2 y + \frac{y^3}{3} \right]_x^{2-x} dx$$

$$= \int_{x=0}^1 x^2 (2-x) + \frac{(2-x)^3}{3} - x^3 - \frac{x^3}{3} dx$$

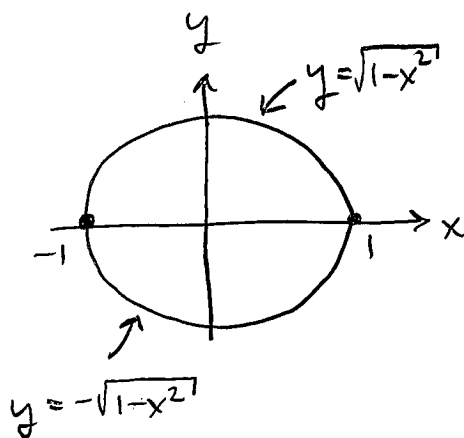
$$= \int_0^1 \left(-\frac{8}{3}x^3 + 4x^2 - 4x + \frac{8}{3} \right) dx$$

$$\begin{aligned} &= \left[-\frac{2}{3}x^4 + \frac{4}{3}x^3 - 2x^2 + \frac{8}{3}x \right]_0^1 \\ &= -\frac{2}{3} + \frac{4}{3} - 2 + \frac{8}{3} \end{aligned}$$

$$= \boxed{\frac{4}{3}}$$

[5]

Question 7: Compute



$$\int_{-1}^1 \int_{-\sqrt{1-x^2}}^{\sqrt{1-x^2}} \frac{2}{(1+x^2+y^2)^2} dy dx = I$$

$$I = \int_{\theta=0}^{2\pi} \int_{r=0}^1 \frac{2}{(1+r^2)^2} r dr d\theta$$

$\begin{cases} u = 1+r^2 \\ du = 2r dr \end{cases}$

$$= \int_{\theta=0}^{2\pi} \left[\frac{1}{1+r^2} \right]_0^1 d\theta$$

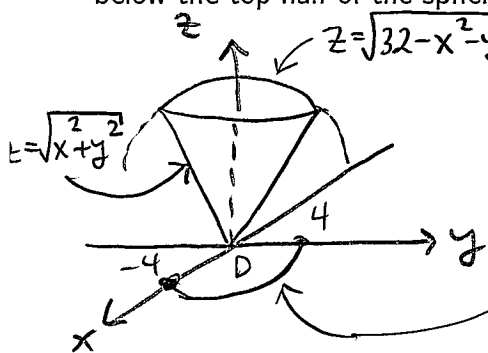
$$= \int_{\theta=0}^{2\pi} \left[-\frac{1}{2} - (-1) \right] d\theta$$

$$= (2\pi) \left(\frac{1}{2} \right)$$

$$= \boxed{\pi}$$

[5]

Question 8: Determine the volume in the first octant of the region lying above the cone $z = \sqrt{x^2 + y^2}$ but below the top half of the sphere $x^2 + y^2 + z^2 = 32$.



Cone intersects sphere in 1st octant:

$$\begin{cases} z = \sqrt{x^2 + y^2} \\ x^2 + y^2 + z^2 = 32 \end{cases} \Rightarrow x^2 + y^2 + (\sqrt{x^2 + y^2})^2 = 32$$

$$\Rightarrow x^2 + y^2 = 16$$

$$= \int_0^{\frac{\pi}{2}} \left(-\frac{128}{3} + \frac{128\sqrt{2}}{3} \right) d\theta$$

$$= \frac{128}{3} (\sqrt{2} - 1) \cdot \frac{\pi}{2}$$

$$= \boxed{\frac{64\pi}{3} (\sqrt{2} - 1)}$$

$$\therefore V = \iint_D (\sqrt{32 - x^2 - y^2} - \sqrt{x^2 + y^2}) dA$$

$$= \int_{\theta=0}^{\frac{\pi}{2}} \int_{r=0}^4 (\sqrt{32 - r^2} - \sqrt{r^2}) r dr d\theta$$

$$= \int_{\theta=0}^{\frac{\pi}{2}} \left[\frac{(32 - r^2)^{3/2}}{3} - \frac{r^3}{3} \right]_0^4 d\theta$$

[5]