

Question 1:

(a)[5 points] Solve for w :

$$|2 - 11w| = 3$$

$$\begin{array}{lcl} 2 - 11w = 3 & \text{or} & 2 - 11w = -3 \\ -11w = 1 & & -11w = -5 \\ w = \frac{-1}{11} & & w = \frac{5}{11} \end{array}$$

$$\therefore w = \frac{-1}{11} \text{ or } \frac{5}{11}$$

(b)[5 points] Solve for x and state your answer using interval notation:

$$\left| \frac{2 - 5x}{3} \right| \geq 5$$

$$\begin{array}{lcl} \frac{2 - 5x}{3} \geq 5 & \text{or} & \frac{2 - 5x}{3} \leq -5 \\ 2 - 5x \geq 15 & & 2 - 5x \leq -15 \\ -5x \geq 13 & & -5x \leq -17 \\ x \leq -\frac{13}{5} & & x \geq \frac{17}{5} \end{array}$$

$$\therefore \left(-\infty, -\frac{13}{5} \right] \cup \left[\frac{17}{5}, \infty \right)$$

Question 2:

- (a)[5 points] Find both (i) the distance and (ii) midpoint between the points $A(-1,4)$ and $B(3,-1)$.

$$\begin{aligned} M &= \left(\frac{x_1 + x_2}{2}, \frac{y_1 + y_2}{2} \right) \\ &= \left(\frac{(-1) + 3}{2}, \frac{4 + (-1)}{2} \right) \\ &= \left(1, \frac{3}{2} \right) \end{aligned}$$

$$\begin{aligned} d &= \sqrt{(x_2 - x_1)^2 + (y_2 - y_1)^2} \\ &= \sqrt{(3 - (-1))^2 + (-1 - 4)^2} \\ &= \sqrt{16 + 25} \\ &= \sqrt{41} \end{aligned}$$

- (b)[5 points] The point (a, a) is a distance 5 units from the point $(3, -4)$. Find all possible values of a .

$$\begin{aligned} 5 &= \sqrt{(3-a)^2 + (-4-a)^2} \\ 25 &= (3-a)^2 + (-4-a)^2 \\ 25 &= 9 - 6a + a^2 + 16 + 8a + a^2 \\ 2a^2 + 2a &= 0 \\ 2a(a+1) &= 0 \\ 2a = 0, \quad a+1 &= 0 \\ a = 0, \quad a &= -1 \end{aligned}$$

Question 3:

(a)[5 points] Complete the square and state the centre and radius of the following circle:

$$x^2 + y^2 - 8x + 10y + 37 = 0$$

$$x^2 - 8x + y^2 + 10y + 37 = 0$$

$$(x-4)^2 - 16 + (y+5)^2 - 25 + 37 = 0$$

$$(x-4)^2 + (y+5)^2 = 4$$

∴ centre $(4, -5)$, radius = 2

(b)[5 points] Give the equation of the circle with centre $\left(\frac{1}{2}, -\frac{1}{2}\right)$ that passes through the point

$$\left(2, \frac{3}{2}\right).$$

$$r = \sqrt{\left(\frac{1}{2} - 2\right)^2 + \left(-\frac{1}{2} - \frac{3}{2}\right)^2}$$

$$= \sqrt{\frac{9}{4} + \frac{16}{4}}$$

$$= \sqrt{\frac{25}{4}}$$

$$= \frac{5}{2}$$

∴ equation is $\left(x - \frac{1}{2}\right)^2 + \left(y + \frac{1}{2}\right)^2 = \frac{25}{4}$

Question 4: This question concerns the equation $x = 2y^2 - 18$.

(a)[4 points] Find the x and y intercepts of the graph of the equation.

x -intercept:

$$x = 2(0)^2 - 18$$

$$x = -18$$

$$\therefore (-18, 0)$$

y -intercept:

$$0 = 2y^2 - 18$$

$$2y^2 = 18$$

$$y^2 = 9$$

$$y = 3, -3$$

$$\therefore (0, 3), (0, -3)$$

(b)[6 points] Determine if the graph of the equation possesses symmetry with respect to the x -axis, the y -axis, or the origin.

x -axis:

$$x = 2y^2 - 18 \leftarrow$$

$$y \leftrightarrow -y :$$

$$x = 2(-y)^2 - 18$$

$$\therefore x = 2y^2 - 18 \leftarrow$$

equivalent, so
 graph possesses
 x -axis
 symmetry

y -axis:

$$x = 2y^2 - 18 \leftarrow$$

$$x \leftrightarrow -x :$$

$$-x = 2y^2 - 18 \leftarrow$$

not equivalent
 so graph
 does not
 possess
 y -axis
 symmetry.

origin:

$$x = 2y^2 - 18 \leftarrow$$

$$(x, y) \leftrightarrow (-x, -y)$$

$$-x = 2(-y)^2 - 18$$

$$-x = 2y^2 - 18 \leftarrow$$

not equivalent,
 so graph does
 not possess
 symmetry
 about the
 origin

Question 5:

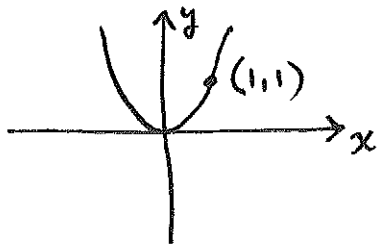
(a)[5 points] Find the zeros of $f(x) = 2(x - 3)^2 - 4$.

$$\begin{aligned}2(x-3)^2 - 4 &= 0 \\2(x-3)^2 &= 4 \\(x-3)^2 &= 2 \\x-3 &= \sqrt{2}, -\sqrt{2} \\x &= 3+\sqrt{2}, 3-\sqrt{2}\end{aligned}$$

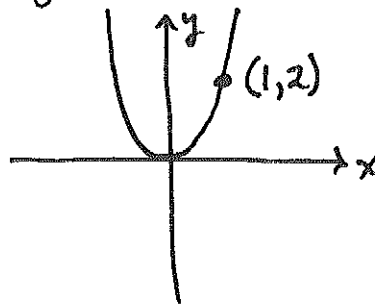
(b)[5 points] Sketch the graph of $f(x) = 2(x - 3)^2 - 4$ by applying transformations to one of the basic functions we saw in class. Show at least one point on your final graph, and also indicate the scale on the x and y axes.

Let $y = f(x)$.

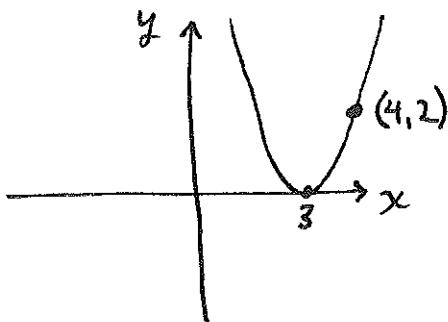
① $y = x^2$:



② $y = 2x^2$:



③ $y = 2(x-3)^2$



④ $y = 2(x-3)^2 - 4$

